

Name:

Math Prep

Date:

Practice Quiz 8-A

1. Estimate the slope of each line below.

a) \_\_\_\_\_

b) \_\_\_\_\_

c) \_\_\_\_\_


d) \_\_\_\_\_

2. In the grid, sketch a line with the given slope. Use a ruler to extend the line to the edges of the grid.

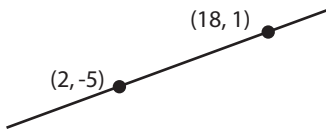
a)  $-\frac{5}{4}$

b) -4

c) 1



3. Find the slope of the line at below, and write it as a reduced fraction.



Name:

Math Prep

Date:

Practice Quiz 8-A

1. Estimate the slope of each line below.

a) \_\_\_\_\_

b) \_\_\_\_\_

c) \_\_\_\_\_


d) \_\_\_\_\_

2. In the grid, sketch a line with the given slope. Use a ruler to extend the line to the edges of the grid.

a)  $-\frac{5}{4}$

b) -4

c) 1



3. Find the slope of the line at below, and write it as a reduced fraction.

