

Name:

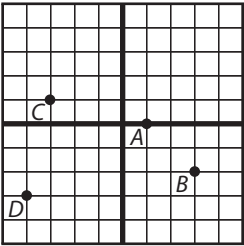
Math Prep

Date:

Practice Quiz 6-A

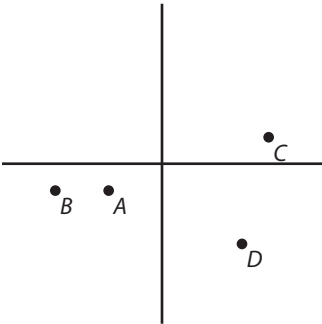
1. State the coordinates of the points labeled at right.

- a) *A*
- b) *B*
- c) *C*
- d) *D*



2. Estimate the coordinates of the points labeled at right.

- a) *A*
- b) *B*
- c) *C*
- d) *D*



Name:

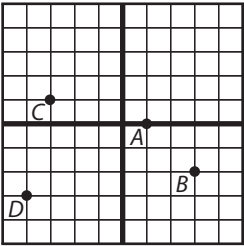
Math Prep

Date:

Practice Quiz 6-A

1. State the coordinates of the points labeled at right.

- a) *A*
- b) *B*
- c) *C*
- d) *D*



2. Estimate the coordinates of the points labeled at right.

- a) *A*
- b) *B*
- c) *C*
- d) *D*

