

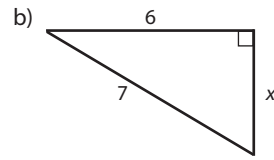
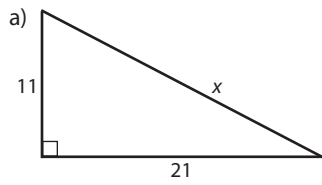
Name:

Math 2

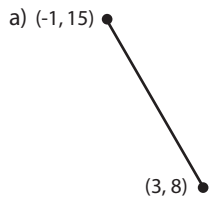
Date:

Practice Quiz 4-A

1. Solve for x . Round answers to the nearest hundredth.



2. Calculate the length d of the line segment, rounded to the nearest hundredth.



3. Use the Pythagorean theorem to identify whether the triangle is acute, right, or obtuse.

a) $a = 20, g = 10, w = 13$