

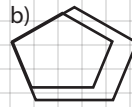
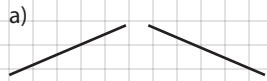
Name:

Math 2

Date:

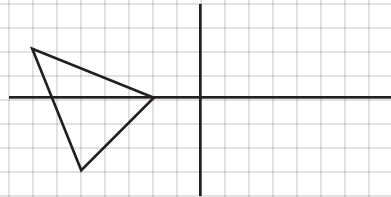
Practice Quiz 3-D

1. State whether each transformation is a dilation, a reflection, or neither.



2. Sketch each image. Label the coordinates of each point in the image.

a) $(x, y) \rightarrow (-x, 2y)$



b) $(x, y) \rightarrow (\frac{1}{2}x, y - 4)$

