

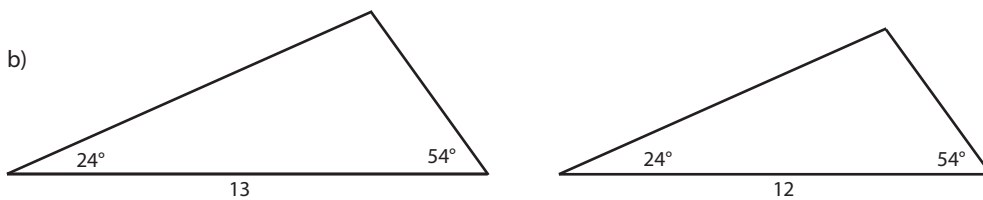
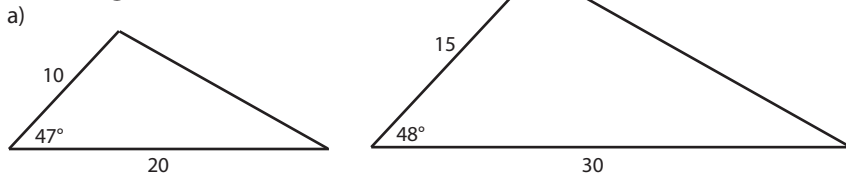
Name:

Math 2

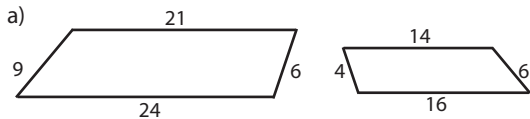
Date:

Practice Quiz 3-C

1. State whether or not the two triangles are similar. State the theorem used, and show the scale factors if using side lengths.



2. State whether or not the two polygons are similar. Justify your answer with a complete sentence that specifies the relevant scale factors.



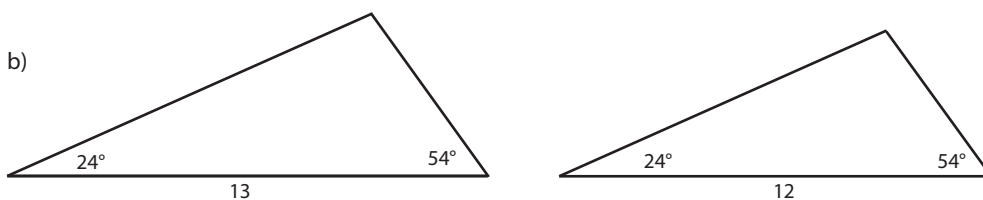
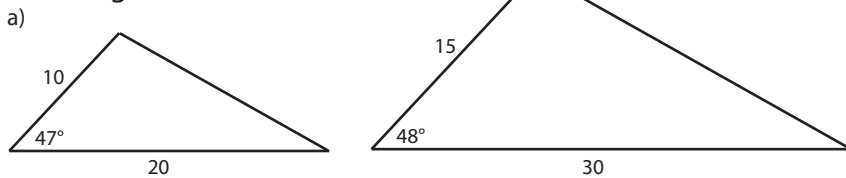
Name:

Math 2

Date:

Practice Quiz 3-C

1. State whether or not the two triangles are similar. State the theorem used, and show the scale factors if using side lengths.



2. State whether or not the two polygons are similar. Justify your answer with a complete sentence that specifies the relevant scale factors.

