

Name:

Math 2

Date:

Practice Quiz 3-B

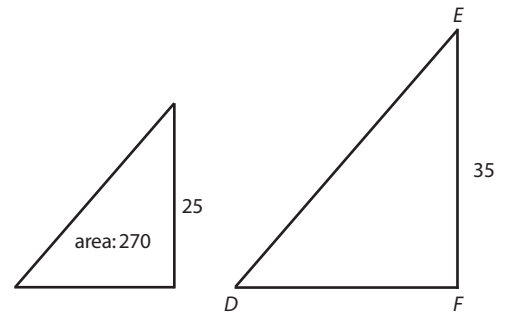
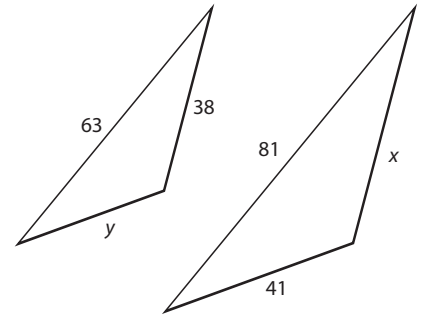
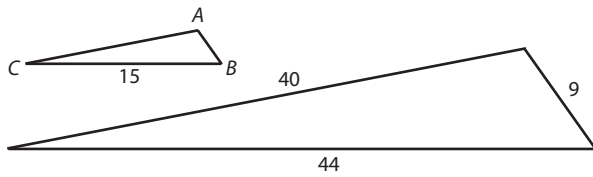
1. The triangles shown are similar. Use multiplication to complete the equations and find the indicated values.

a)  $x =$

b)  $y =$

c) for  $\triangle ABC$ , perimeter =

d) for  $\triangle DEF$ , area =



Name:

Math 2

Date:

Practice Quiz 3-B

1. The triangles shown are similar. Use multiplication to complete the equations and find the indicated values.

a)  $x =$

b)  $y =$

c) for  $\triangle ABC$ , perimeter =

d) for  $\triangle DEF$ , area =

