

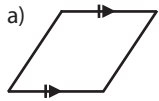
Name:

Math 2

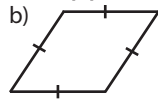
Date:

Practice Quiz 2-D

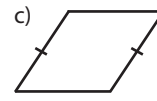
1. For each shape, check each item that applies based on the markings.



- quadrilateral
- square
- rectangle
- rhombus
- parallelogram
- kite
- trapezoid



- quadrilateral
- square
- rectangle
- rhombus
- parallelogram
- kite
- trapezoid



- quadrilateral
- square
- rectangle
- rhombus
- parallelogram
- kite
- trapezoid

2. Solve for  $x$  in the following quadrilaterals by writing and solving an equation.

