

Name:

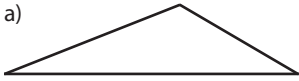
Math 2

Date:

Practice Quiz 2-C

1. State whether each triangle is scalene, isosceles, or equilateral.

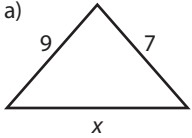
a)



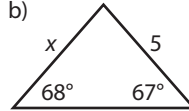
b) $m\angle A = 65^\circ, m\angle B = 80^\circ$

2. State the possible values of x . Sketches are not drawn to scale.

a)

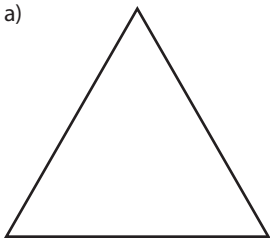


b)



3. Sketch all three altitudes of each triangle below.

a)



b)

