

Name:

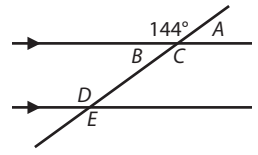
Math 2

Date:

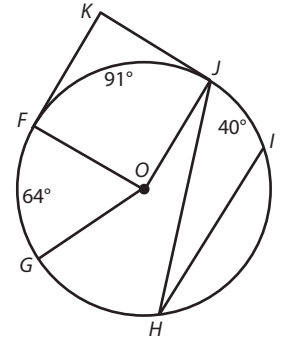
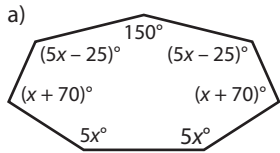
Practice Quiz 2-B

1. Identify the measure of each of the following angles. Use a term to justify each answer.

- a) $\angle A$
- b) $\angle B$
- c) $\angle C$
- d) $\angle D$
- e) $\angle E$
- f) $\angle FOG$
- g) $\angle FOJ$
- h) $\angle FKJ$
- i) $\angle IHJ$



2. Write and solve an equation for x .



3. Write and solve an equation to find the number of sides n of a polygon with angles as stated.

- a) The sum of the interior angles is 1800°.
- b) Each angle is 174°.