

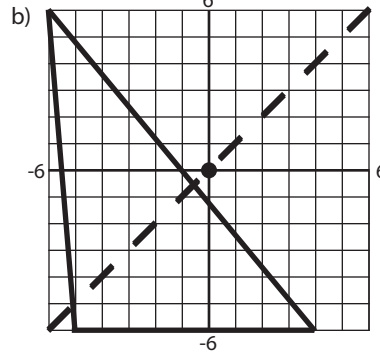
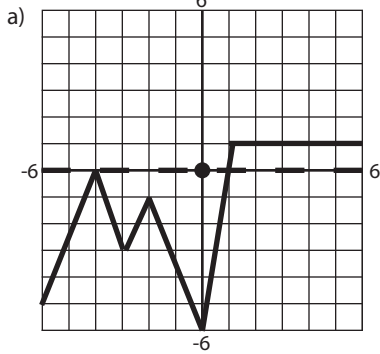
Name:

Math 1

Date:

Practice Quiz 7-B

1. Sketch the image by reflecting the pre-image across the line of symmetry provided.



2. Write the coordinates of the point $(8, -11)$ reflected across the following lines.

a) the x -axis

b) the line $y = x$

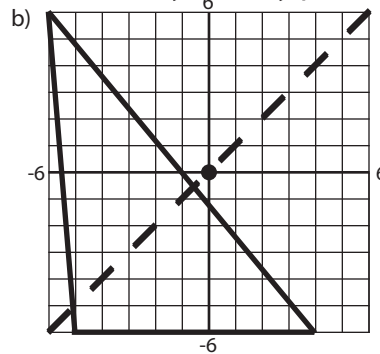
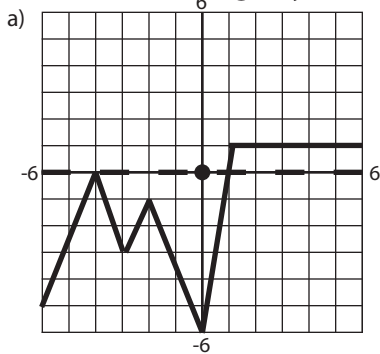
Name:

Math 1

Date:

Practice Quiz 7-B

1. Sketch the image by reflecting the pre-image across the line of symmetry provided.



2. Write the coordinates of the point $(8, -11)$ reflected across the following lines.

a) the x -axis

b) the line $y = x$